

# The ~ is the fastest ~.

A: Which is the fastest of the three?  
 B: The plane is the fastest of the three.



**Role Play!**

Write the answer, add "est".

1. ( )

2. ( )

3. ( )

|                        |                       |                        |                     |
|------------------------|-----------------------|------------------------|---------------------|
| fast => <u>fastest</u> | big => <u>biggest</u> | ugly => <u>ugliest</u> | good => <u>best</u> |
|------------------------|-----------------------|------------------------|---------------------|


good | cute | big | ugly | small | bad

Write your partner's answer, "O."

|    |                |  |                     |  |                |  |
|----|----------------|--|---------------------|--|----------------|--|
| 1. | gray Totoro    |  | blue Totoro         |  | white Totoro   |  |
| 2. | spider         |  | dog                 |  | rabbit         |  |
| 3. | melon kakigori |  | strawberry kakigori |  | lemon kakigori |  |

**Writing!**

**Example:** The plane is the fastest of the three. (fast)



1. \_\_\_\_\_  
(big)

2. \_\_\_\_\_  
(cute)

3. \_\_\_\_\_  
(good)

**Practice!**

Write. Then, interview your partner.

4. Which is the ( ) of the four?

Winter | Spring | Summer | Fall

\_\_\_\_\_

(cold)

\_\_\_\_\_

(hot)



5. Which is the ( ) of all?

|           |         |        |
|-----------|---------|--------|
| The U.S.A | England | Russia |
| Canada    | France  | Japan  |
| Mexico    | Italy   | Taiwan |

\_\_\_\_\_

(big)

\_\_\_\_\_

(small)



6. Which is the ( ) of all?

|            |        |           |
|------------|--------|-----------|
| watermelon | orange | apple     |
| grape      | pear   | pineapple |
| lemon      | cherry | banana    |
| strawberry |        |           |



\_\_\_\_\_

(good)

\_\_\_\_\_

(bad)


Write your partner's answer.

|    |  |    |  |
|----|--|----|--|
| 4. |  | 5. |  |
|----|--|----|--|



Practice!

Who is the shortest student?


$$E = mc^2$$


| Student's Name | Height (cm) | Order of height |
|----------------|-------------|-----------------|
| Taro           |             |                 |
| Matt           | 280         | 1               |
| Haru           | 195         |                 |
| Lisa           |             |                 |
| Aoi            |             |                 |
| Alice          | 212         |                 |

1. Use these hints and write your answers. How tall are they?

Haru is 15 cm shorter than Taro.

Matt is 120 cm taller than Lisa.

Aoi is 3 cm taller than Alice.



2. Write the order of height from 1 to 6, with 1 being the tallest.

3. Who is the shortest student of all?