

Answer Key & Examples

Eigo Ganbare!!

全員参加で楽しくガンバロウ

Class (2) No (1) Name (Minori Kobayashi)

The ~ is the fastest ~.

A: Which is the fastest of the three?

B: The plane is the fastest of the three.



Role Play!


Write the answer, add "est".

1.



(biggest)

2.



(ugliest)

3.



(best)

fast => fastest

big => biggest

ugly => ugliest

good => best

good | cute | ~~big~~ | ~~ugly~~ | small | bad

Write your partner's answer, "O."


1.	gray Totoro	<input checked="" type="radio"/>	blue Totoro	<input type="radio"/>	white Totoro	<input type="radio"/>
2.	spider	<input type="radio"/>	dog	<input checked="" type="radio"/>	rabbit	<input type="radio"/>
3.	melon kakigori	<input type="radio"/>	strawberry kakigori	<input checked="" type="radio"/>	lemon kakigori	<input type="radio"/>

Writing!

Example: The plane is the fastest of the three. (fast)



1. The gray Totoro is the biggest of the three.
(big)



2. The dog is the cutest of the three.
(cute)



3. The strawberry kakigori is the best of the three.
(good)



Practice!

Write. Then, interview your partner.

4. Which is the (**hottest**) of the four?

Winter | Spring | Summer | Fall

Winter is the coldest of the four.
(cold)

Summer is the hottest of the four.
(hot)



5. Which is the (**smallest**) of all?

The U.S.A	England	Russia
Canada	France	Japan
Mexico	Italy	Taiwan




Russia is the biggest of all.
(big)

Taiwan is the smallest of all.
(small)

6. Which is the (**best**) of all?

watermelon	orange	apple
grape	pear	pineapple
lemon	cherry	banana
strawberry		



Watermelon is the best of all.
(good)

Pear is the worst of all.
(bad)

Write your partner's answer.

4. Summer	5. Russia	6. Orange
------------------	------------------	------------------

Practice!

Who is the shortest student?




Student's Name	Height (cm)	Order of height
Taro	210	4
Matt	280	1
Haru	195	5
Lisa	160	6
Aoi	215	2
Alice	212	3

1. Use these hints and write your answers. How tall are they?

Haru is 15 cm shorter than Taro.

Matt is 120 cm taller than Lisa.

Aoi is 3 cm taller than Alice.



2. Write the order of height from 1 to 6, with 1 being the tallest.

3. Who is the shortest student of all?

Lisa is the shortest student of all.